



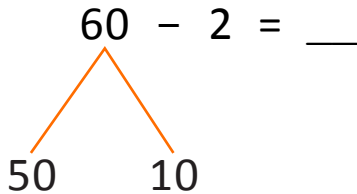
NAME _____ DATE _____

ADD/SUBTRACT BY USING NUMBER BONDS

Solve using by number bonds.

1. a) Marisol solved $60 - 2$ what numbers complete the number bond to show how she used "take from 10"?

Solution:



$10 - 2 = 8$

$50 + 8 = 58$

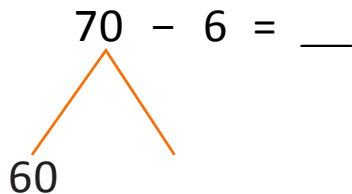
50, 10

60, 0

54, 6

58, 2

- b) Carla has 70 paper clips. She gives 6 away. Write a number sentence that shows how many Carla has left?



$10 - 6 = \underline{\quad}$

$\underline{\quad} + 60 = \underline{\quad}$

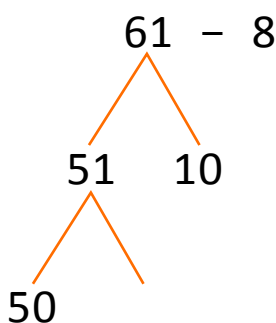
Carla has left with $\underline{\quad}$ paper clips.

- c) Isaac has 61 pencils. He gives 8 pencils to a friend. How many pencils does Isaac have left? Draw a picture and write a number sentences to show how you know?

Pencils with Isaac $\underline{\quad}$

Number of pencils gave to a friend $\underline{\quad}$

Remaining pencils that Isaac have left = $61 - 8 = \underline{\quad}$



$10 - \underline{\quad} = \underline{\quad}$

$\underline{\quad} + \underline{\quad} = 3$

$\underline{\quad} + \underline{\quad} = 53$