



NAME _____

DATE _____

SOLVING PROBLEMS ON NUMBER BONDS

Solve the following problems as done above circle the number sentence if you must subtract from the 10.

1) $12 - 6 = \underline{\quad}$

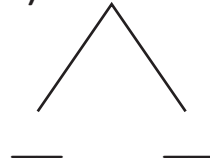


$10 - 6 = \underline{\quad}$

$4 + 2 = \underline{\quad}$

$12 - 6 = \underline{\quad}$

4) $13 - 3 = \underline{\quad}$

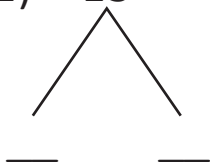


$10 - 3 = \underline{\quad}$

$7 + 3 = \underline{\quad}$

$13 - 3 = \underline{\quad}$

2) $13 - 5 = \underline{\quad}$

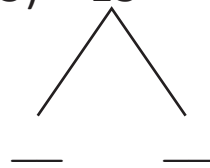


$10 - 5 = \underline{\quad}$

$5 + 3 = \underline{\quad}$

$13 - 5 = \underline{\quad}$

5) $13 - 6 = \underline{\quad}$

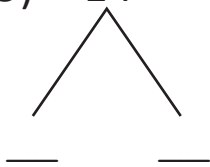


$10 - 6 = \underline{\quad}$

$4 + 3 = \underline{\quad}$

$13 - 6 = \underline{\quad}$

3) $14 - 3 = \underline{\quad}$

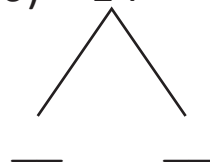


$5 - 3 = \underline{\quad}$

$10 + 1 = \underline{\quad}$

$14 - 3 = \underline{\quad}$

6) $14 - 5 = \underline{\quad}$



$10 - 5 = \underline{\quad}$

$5 + 4 = \underline{\quad}$

$14 - 5 = \underline{\quad}$