



NAME _____

DATE _____

SOLVING PROBLEMS ON NUMBER BONDS

Solve the following problems as done above circle the number sentence if you must subtract from the 10.

1) $14 - 6 = \underline{\quad}$

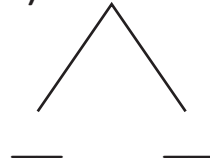


$10 - 6 = \underline{\quad}$

$4 + 4 = \underline{\quad}$

$14 - 6 = \underline{\quad}$

4) $15 - 6 = \underline{\quad}$



$10 - 6 = \underline{\quad}$

$4 + 5 = \underline{\quad}$

$15 - 6 = \underline{\quad}$

2) $15 - 3 = \underline{\quad}$

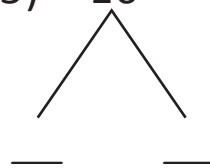


$5 - 3 = \underline{\quad}$

$10 + 2 = \underline{\quad}$

$15 - 3 = \underline{\quad}$

5) $16 - 3 = \underline{\quad}$

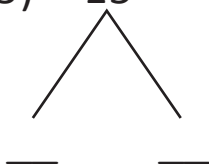


$6 - 3 = \underline{\quad}$

$10 + 3 = \underline{\quad}$

$16 - 3 = \underline{\quad}$

3) $15 - 5 = \underline{\quad}$

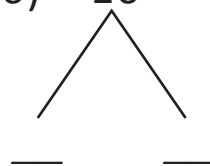


$10 - 5 = \underline{\quad}$

$5 + 5 = \underline{\quad}$

$15 - 5 = \underline{\quad}$

6) $16 - 5 = \underline{\quad}$



$10 - 5 = \underline{\quad}$

$5 + 6 = \underline{\quad}$

$16 - 5 = \underline{\quad}$