



NAME _____

DATE _____

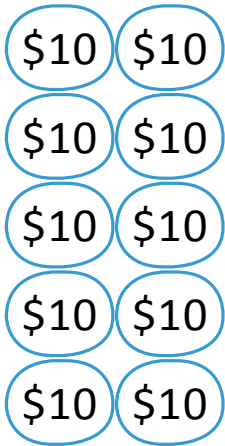
CONVERT DOLLARS INTO SMALL UNITS

Explore \$1000. How many \$10 bills change can we get for a thousand - dollar bill?

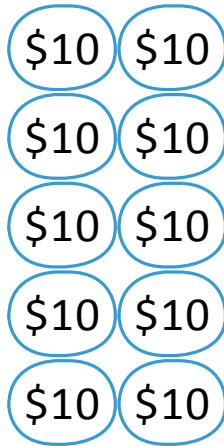
Example:

How many \$10 bills are equal to a \$1000 bill?

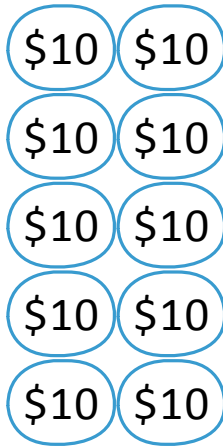
Justify your answer using words pictures or numbers. Write your answer as a statement.



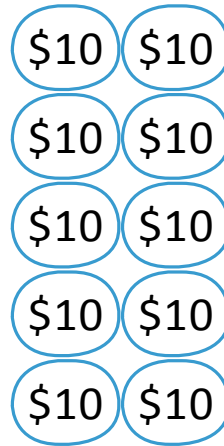
Ten \$10 bills.



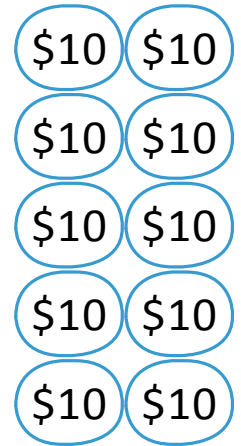
Ten \$10 bills.



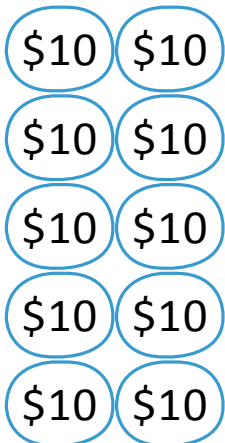
Ten \$10 bills.



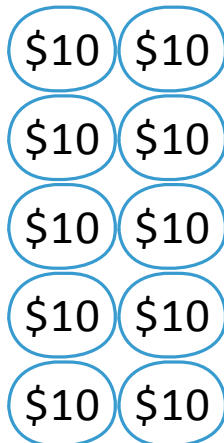
Ten \$10 bills.



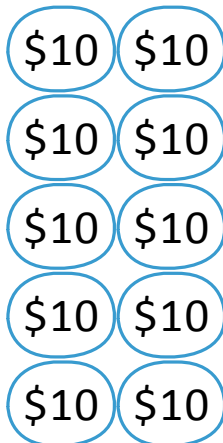
Ten \$10 bills.



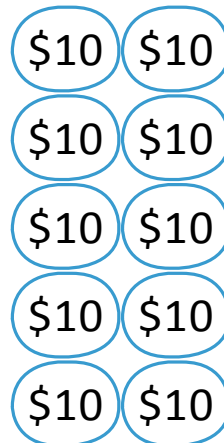
Ten \$10 bills.



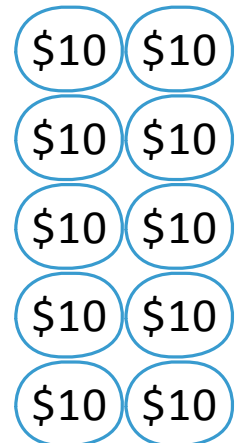
Ten \$10 bills.



Ten \$10 bills.



Ten \$10 bills.



Ten \$10 bills.

_____ \$10 bill makes a \$1000.