




NAME \_\_\_\_\_ DATE \_\_\_\_\_

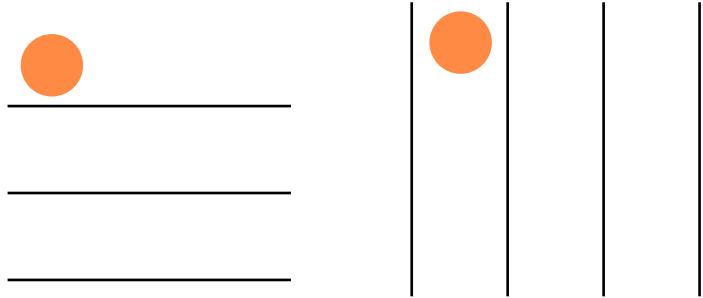
## OBJECTS IN ROWS AND COLUMNS

Compose arrays from rows and columns and count to find the total using objects.

1) Circle groups of 3. Redraw the groups of 3 as rows and then as columns.




**Solution:**




\_\_\_ groups of \_\_\_ = \_\_\_.

2) Circle groups of 5. Then draw the clouds into 2 equal rows.



**Solution:**




\_\_\_ groups of \_\_\_ = \_\_\_.

3) Circle groups of 4. Redraw the groups of 4 as rows and then as columns.



**Solution:**



\_\_\_ groups of \_\_\_ = \_\_\_.