




NAME _____ DATE _____

OBJECTS IN ROWS AND COLUMNS

Compose arrays from rows and columns and count to find the total using objects.


1) Circle groups of 6. Redraw the groups of 6 as rows and then as columns.




Solution:




__ groups of __ = __.



2) Circle groups of 3. Redraw the groups of 3 as rows and then as columns.



Solution:

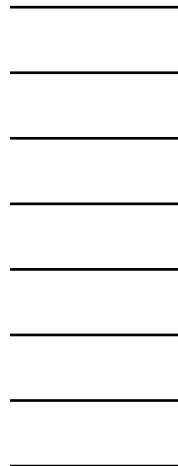


__ groups of __ = __.

3) Circle groups of 3. Redraw the groups of 3 as rows and then as columns.



Solution:



__ groups of __ = __.