



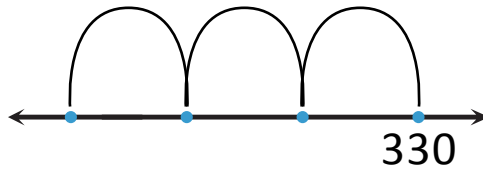
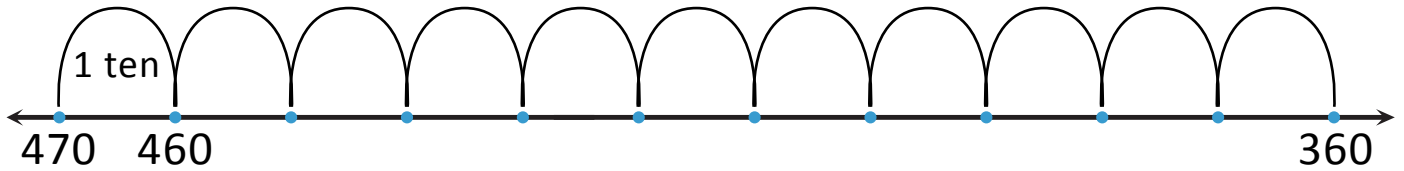
NAME _____ DATE _____

USING NUMBERS IN DIFFERENT FORMS

Count ones, tens and hundreds. Use bundles, number lines and place value disks.

1. Write down the difference between 470 to 330? You might use number lines, place value disks, bundles or number.

Number lines:



$$\begin{aligned} _ \text{ tens} &= _ \text{ tens} + 4 \text{ tens} \\ &= _ + _ = _ \end{aligned}$$


Place value disks:

H	T	O

(OR)

H	T	O

Bundles of 140:



$$_ + _ + _ + _ + _ = _$$