



NAME \_\_\_\_\_

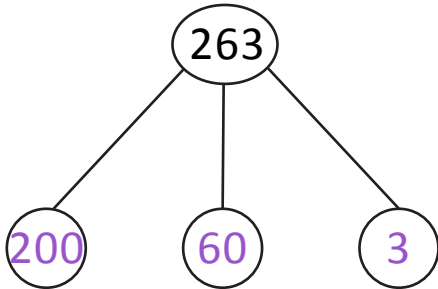
DATE \_\_\_\_\_

## NUMBERS IN WORD FORMS

Complete the number bonds to show the hundreds, tens and ones in each number. Write the number in word form.

Example:

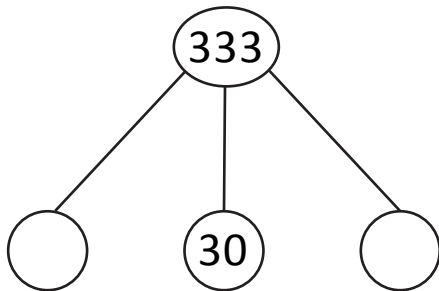
263



2 hundreds 6 tens 3 ones.

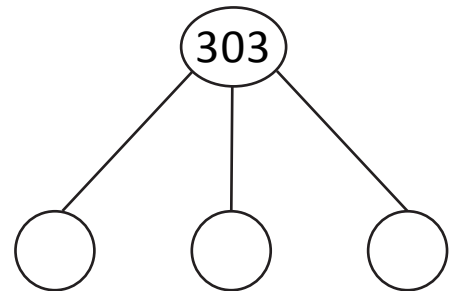
Observe the above example and complete the following problems.

a) 333



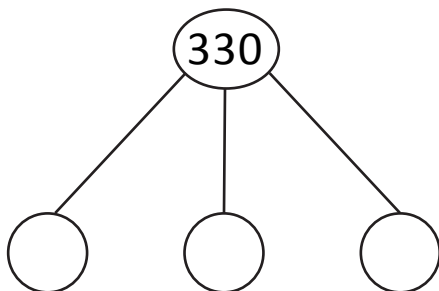
\_\_\_ hundreds \_\_\_ tens \_\_\_ ones.

c) 303



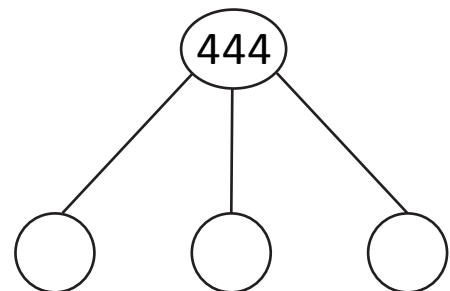
\_\_\_ hundreds \_\_\_ ones.

b) 330



\_\_\_ hundreds \_\_\_ tens.

d) 444



\_\_\_ hundreds \_\_\_ tens \_\_\_ ones.