



NAME _____

DATE _____

APPLICATION OF FRACTIONS TO TELL TIME


Tell time to the nearest five minutes. Relate a.m. and p.m. to time of day.

Draw the hands on the analogue clock to match the time on the digital clock. Then circle a.m. or p.m. based on the description given.

a) Brushing your teeth before bed time.




a.m. or p.m.



b) Recess after lunch.




a.m. or p.m.



c) Leaving school after four.



a.m. or p.m.



d) Sun sets in the evening.



a.m. or p.m.

