



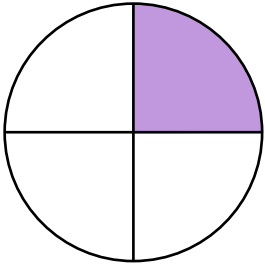
NAME _____

DATE _____

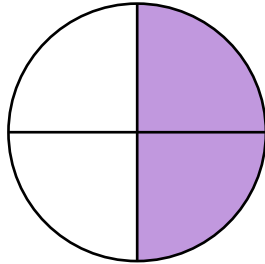
APPLICATION OF FRACTIONS TO TELL TIME

Construct a paper clock by partitioning a circle into halves and quarters and tell time to the half hour or quarter hour.

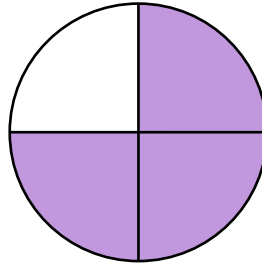
1) a) Tell what fraction of each clock is shaded in the space below using the words quarter, quarters, half or halves.




__ Quarter



__ Quarters



__ Quarters



__ Quarters
(Complete whole part)

b) What the time is shown on each clock.

