



NAME _____


DATE _____

DOUBLE GROUPS

Relate doubles to even numbers and write a number sentence to express the sums.

1) Q) Draw to double the group you see and complete the sentence.


a)



There are ___ parrots in each group.

$$_ + _ = _.$$

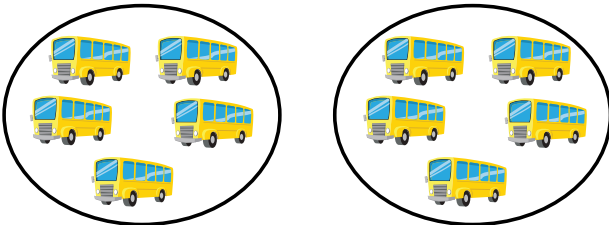
b)



There are ___ peacocks in each group.

$$_ + _ = _.$$

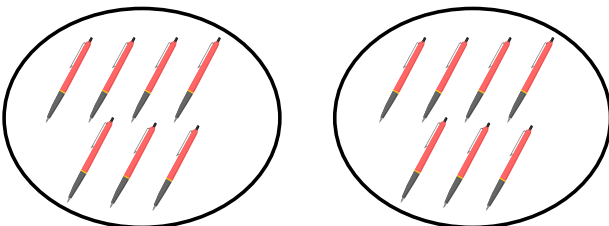
c)



There are ___ buses in each group.

$$_ + _ = _.$$

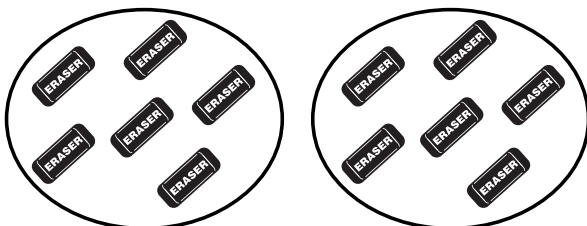
d)



There are ___ pens in each group.

$$_ + _ = _.$$

e)



There are ___ erasers in each group.

$$_ + _ = _.$$