




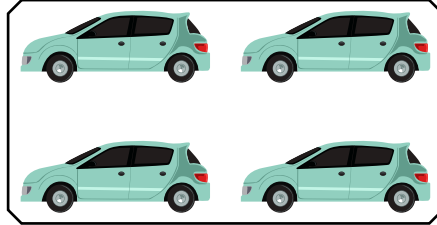

NAME _____

DATE _____

FOUNDATION CONCEPT FOR MULTIPLICATION

Learn the multiplication by repeated addition.

1)



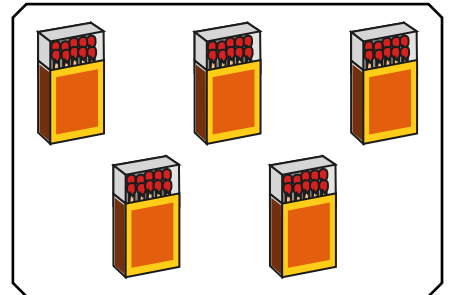
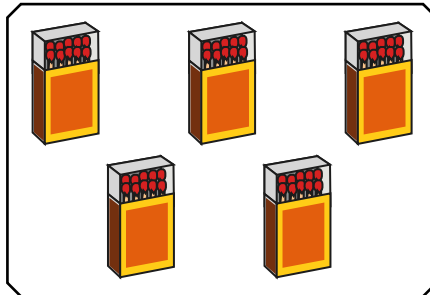
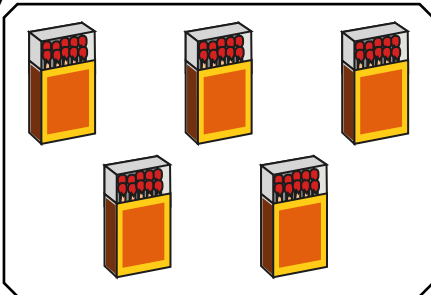
Solution:

--	--	--

$$= _ + _ + _ = _.$$

$$= 3 \text{ groups of } _ = _.$$

2)



Solution:

--	--	--

$$= _ + _ + _ = _.$$

$$= 3 \text{ groups of } 5 = _.$$