



NAME _____

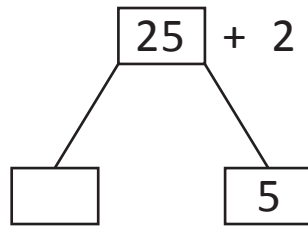
DATE _____

NUMBER BONDS

Use the number bond and add the sums.

1)

25 and 2 make

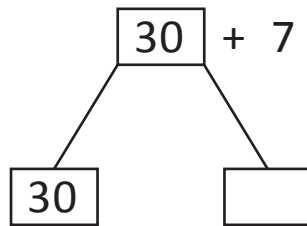


$$2 + \underline{\quad} = 7$$

$$20 + \underline{\quad} = 27$$

2)

30 and 7 make

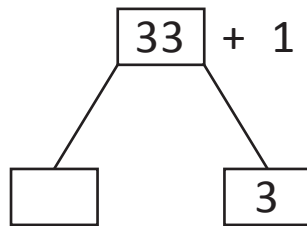


$$7 + \underline{\quad} = 7$$

$$30 + \underline{\quad} = 37$$

3)

33 and 1 make

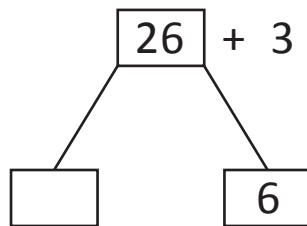


$$1 + \underline{\quad} = 4$$

$$30 + \underline{\quad} = 34$$

4)

26 and 3 make

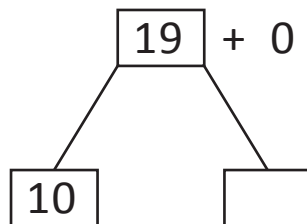


$$3 + \underline{\quad} = 9$$

$$20 + \underline{\quad} = 29$$

5)

19 and 0 make



$$0 + \underline{\quad} = 9$$

$$10 + \underline{\quad} = 19$$