



NAME _____

DATE _____

NUMBER BONDS

Do the following sums by making 10.

Example:



+



=




9 and 1 is = 10


1)



+




=



2 and 8 is = ___


2)



+



=




4 and 6 is = ___

3)



+



=



3 and 7 is = ___

4)



+



=



1 and 9 is = ___