







NAME _____

DATE _____

ARRANGEMENTS OF ROWS AND COLUMNS

Compose arrays from rows and columns and count to find the total using objects.

1) i) Count the objects in the arrays from left to right by rows and by columns.



ii) Now answer the following questions.

a) Dogs are ___ rows of ___.

b) Foxes are ___ columns of ___.

c) How many dogs are there in a row? ___.

d) How many foxes are there in a row? ___.

e) How many dogs are there in a column? ___.

f) How many foxes are there in a column? ___.

g) Number of dogs in total? ____.

h) Number of foxes in total? ____.