




NAME _____ DATE _____

ARRANGEMENTS OF ROWS AND COLUMNS


Compose arrays from rows and columns and count to find the total using objects.

1) Draw Monkey and camels as columns of 7 as you like.

Solution:




__ columns of 7 = __




__ columns of 7 = __

2) Draw Cups and bottles as columns of 10 as you like.

Solution:



__ columns of 10 = __



__ columns of 10 = __