




NAME \_\_\_\_\_

DATE \_\_\_\_\_

## ARRANGEMENT OF ROWS AND COLUMNS

Create arrays using shape tiles with gaps.

1) a) Create two different arrays with the circles given.



**Solution:**


\_\_\_\_\_  
\_\_\_\_\_  
\_\_\_\_\_

\_\_ rows of \_\_.

\_\_ + \_\_ + \_\_ = \_\_.

b) Create another array with the circles from the set above.

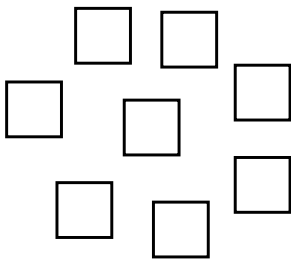
**Solution:**



\_\_ columns of \_\_.

\_\_ + \_\_ = \_\_.

2) a) Create two different arrays with the given squares.



**Solution:**


\_\_\_\_\_  
\_\_\_\_\_  
\_\_\_\_\_

\_\_ rows of \_\_.

\_\_ + \_\_ = \_\_.

b) Create another array with the squares from the set above.

**Solution:**



\_\_ columns of \_\_.

\_\_ + \_\_ = \_\_.