



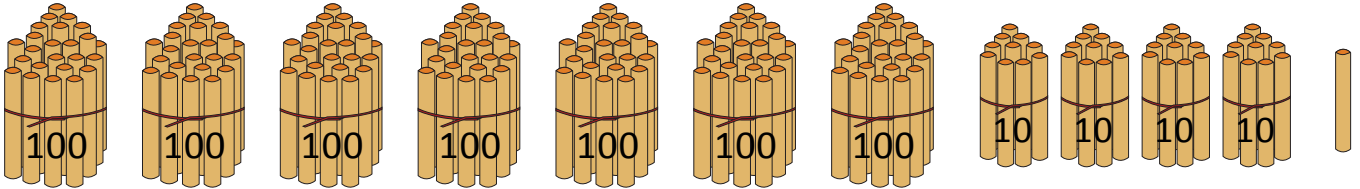
NAME \_\_\_\_\_

DATE \_\_\_\_\_

## BUNDLE AND COUNT

These are bundles of hundreds, tens and ones. Write the numeral, expanded form and number name for each number shown.

Example:

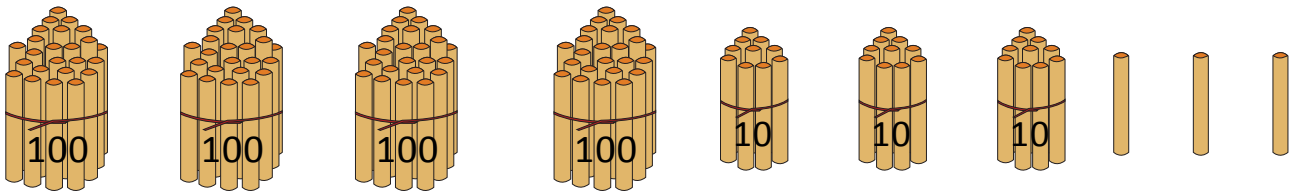


(a) Numeral = 741.

(b) Expanded form = 700 + 40 + 1.

(c) Number name = 7 hundreds + 4 tens + 1 one.

1)

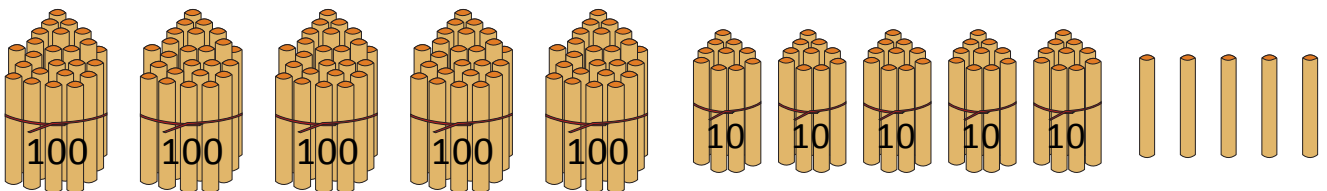


(a) Numeral = \_\_\_\_.

(b) Expanded form = \_\_\_\_ + \_\_\_\_ + \_\_\_\_.

(c) Number name = \_\_\_\_\_ + \_\_\_\_\_ + \_\_\_\_\_.

2)



(a) Numeral = \_\_\_\_.

(b) Expanded form = \_\_\_\_ + \_\_\_\_ + \_\_\_\_.

(c) Number name = \_\_\_\_\_ + \_\_\_\_\_ + \_\_\_\_\_.