

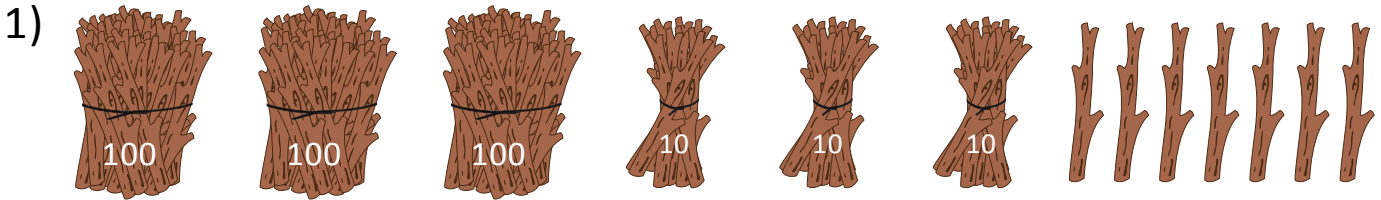


NAME \_\_\_\_\_

DATE \_\_\_\_\_

## BUNDLE AND COUNT

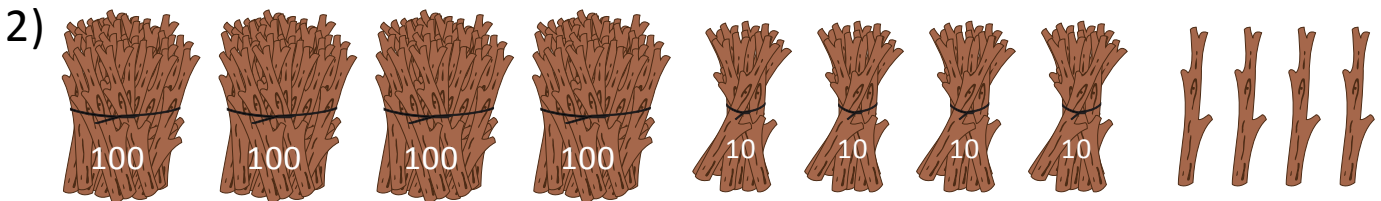
These are bundles of hundreds, tens and ones. Write the numeral, expanded form and number name for each number shown.



(a) Numeral = \_\_\_\_.

(b) Expanded form = \_\_\_\_ + \_\_\_\_ + \_\_\_\_.

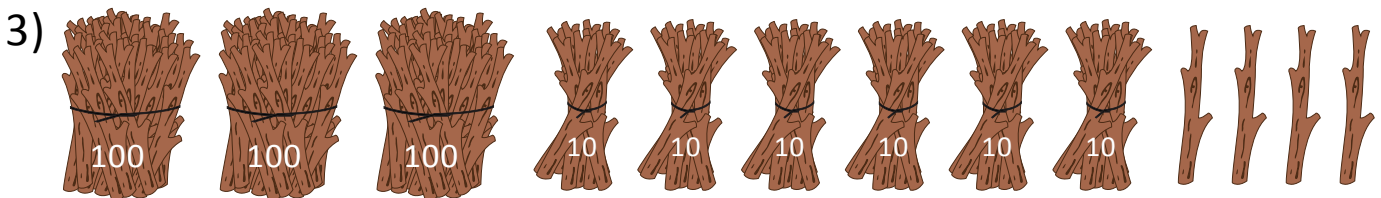
(c) Number name = \_\_\_\_\_ + \_\_\_\_\_ + \_\_\_\_\_.



(a) Numeral = \_\_\_\_.

(b) Expanded form = \_\_\_\_ + \_\_\_\_ + \_\_\_\_.

(c) Number name = \_\_\_\_\_ + \_\_\_\_\_ + \_\_\_\_\_.



(a) Numeral = \_\_\_\_.

(b) Expanded form = \_\_\_\_ + \_\_\_\_ + \_\_\_\_.

(c) Number name = \_\_\_\_\_ + \_\_\_\_\_ + \_\_\_\_\_.