



NAME _____

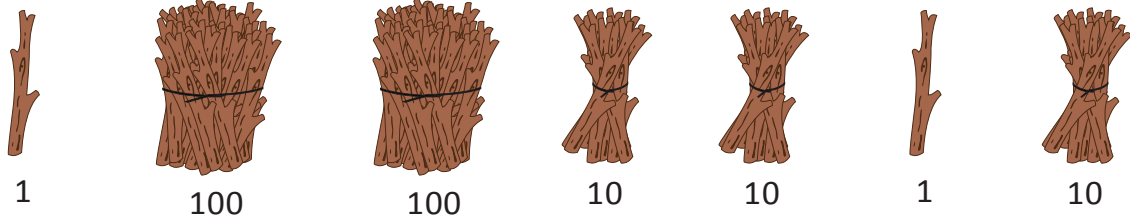
DATE _____

BUNDLE AND COUNT

Count the objects in bundles by using ones, tens and hundreds.

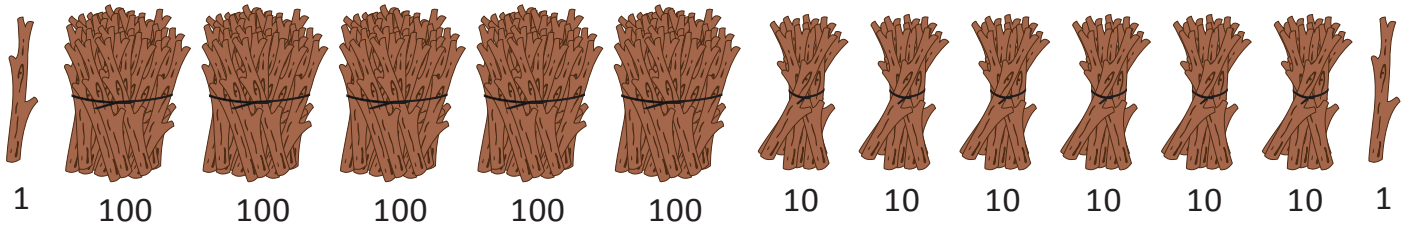
Example:

a) Sally bundled her sticks in hundreds, tens and ones.



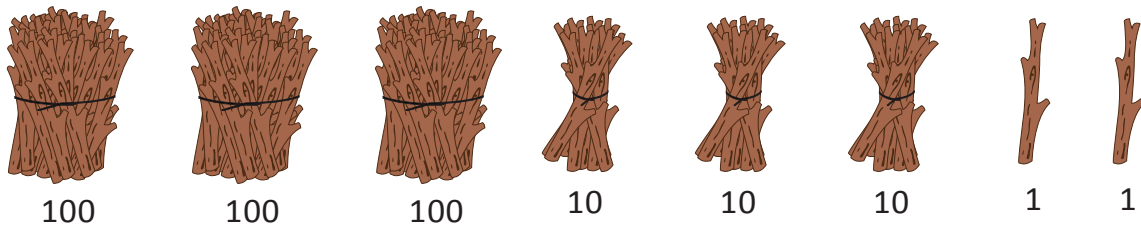
How many sticks does Sally have? 232.

b) Draw 3 more hundreds and 3 more tens. Count and write how many sticks Sally has now?



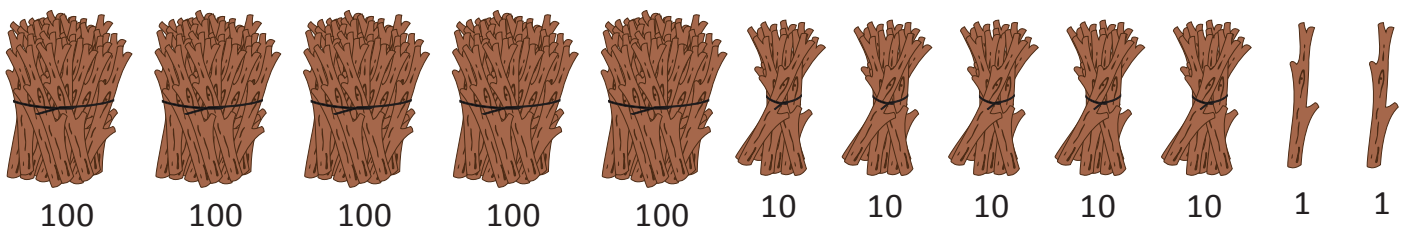
Sally has now 562 sticks.

1. a) Begum bundled her sticks in hundreds, tens and ones.



How many sticks does Begum have? _____.

1. b) Draw 2 more hundreds and 2 more tens. Count and write how many sticks Begum has now?



Begum has now _____ sticks.