



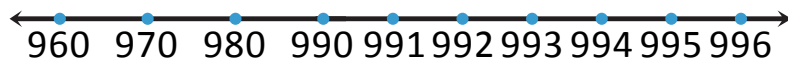
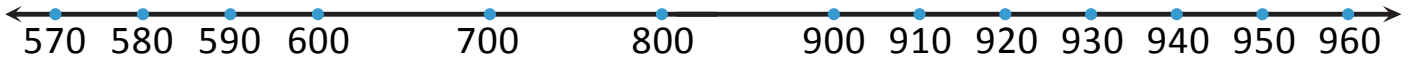
NAME \_\_\_\_\_ DATE \_\_\_\_\_

## COUNTING DOLLARS ON NUMBER LINE

Count from \$1, \$10 to \$1000 on the place value chart and the empty number line.

1. Use each number line to show a different way to count from \$570 to \$996.

**SOLUTION: 1st method:**

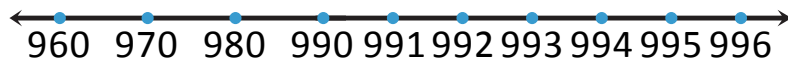
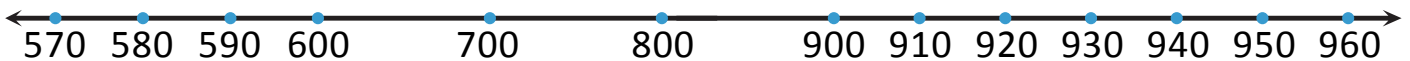


H	T	O



\_\_\_ hundreds + \_\_\_ tens + \_\_\_ ones.

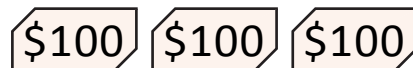
\_\_\_ + \_\_\_ + \_\_\_ = \_\_\_

**2nd method:**



 = \_\_\_ ones.

 = \_\_\_ tens.  


 = \_\_\_ hundreds.

\_\_\_ + \_\_\_ + \_\_\_ = \_\_\_