



NAME _____

DATE _____

COUNTING NUMBERS IN GROUPS

Problem solving questions.

1. Out of 100 boxes how many cricket balls you will get? If cricket balls come in boxes of 10. Explain your answer using words pictures of numbers?

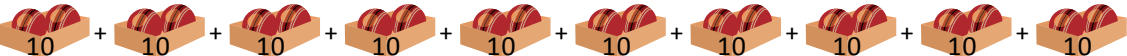
 = In ___ boxes.

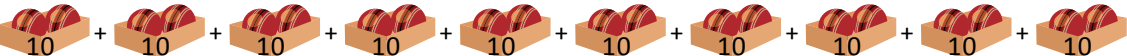
 = In ___ boxes.

 = In ___ boxes.

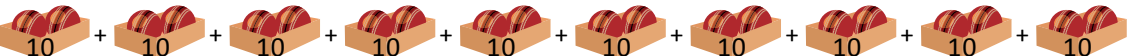
 = In ___ boxes.

 = In ___ boxes.

 = In ___ boxes.

 = In ___ boxes.

 = In ___ boxes.

 = In ___ boxes.

 = In ___ boxes.

___ + ___ + ___ + ___ + ___ + ___ + ___ + ___ + ___ + ___ + ___ = _____.

Total cricket balls in 100 boxes = _____.