



NAME _____

DATE _____

COUNTING NUMBERS IN GROUPS

Problem solving questions.




Example:

1. (i) The principal wants to have 300 pencils for the second graders for October, November and December. How many more boxes of pencils does he need to get? Explain your answer using words, pictures or numbers. (Pencils come in boxes of 10).

Required pencils = 300.

(Pencils come in boxes of 10)

Required boxes = 30.



100 boxes + 100 boxes + 100 boxes = 10 + 10 + 10.

Required pencils boxes = 10 (for 100 pencils).