




NAME _____ DATE _____

COUNT OBJECTIVES ACCORDING BUNDLES

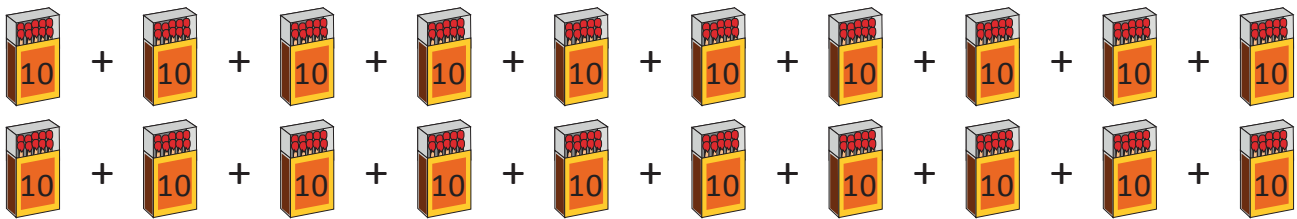
Observe the given objectives and write correct answer for the questions given.

1) These are red chillies with 10 in each cup.



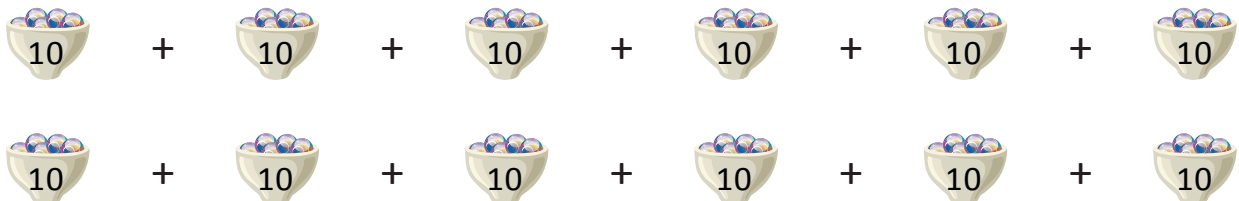
- How many tens are there? ____.
- How many hundreds? ____.
- How many chillies are there in all? _____.

2) These are bundles with 10 matchsticks in each.



- How many tens are there? ____.
- How many hundreds? ____.
- How many matchsticks are there in all? _____.

3) These are cups with 10 marbles in each.



- How many tens are there? ____.
- How many hundreds? ____.
- How many marbles are there in all? _____.