

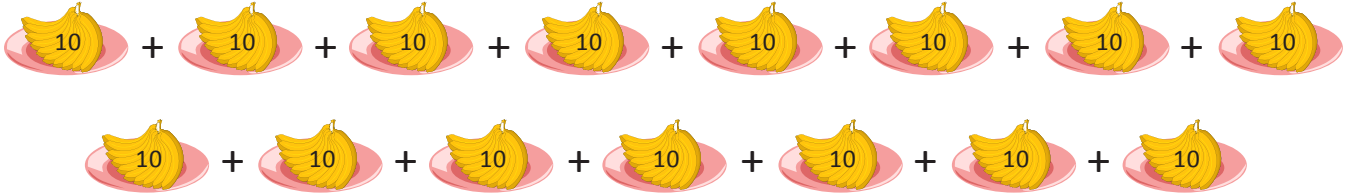


NAME \_\_\_\_\_ DATE \_\_\_\_\_

## COUNT OBJECTIVES ACCORDING BUNDLES

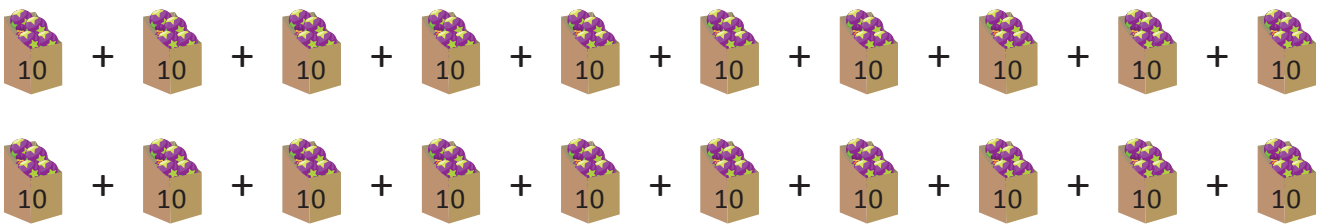
Observe the given objectives and write correct answer for the questions given.

1) These are plates with 10 bananas each.




- How many tens are there? \_\_\_\_.
- How many hundreds? \_\_\_\_.
- How many bananas are there in all? \_\_\_\_.

2) These are boxes with 10 lollipops each.



- How many tens are there? \_\_\_\_.
- How many hundreds? \_\_\_\_.
- How many lollipops are there in all? \_\_\_\_.

3) These are glasses with 10 rings in each.



- How many tens are there? \_\_\_\_.
- How many hundreds? \_\_\_\_.
- How many marbles are there in all? \_\_\_\_.